

Handout

Enrichment

2 - 3
Section 11

A Ton of Gold Coins

Find the total number of gold coins in each collection.

a)

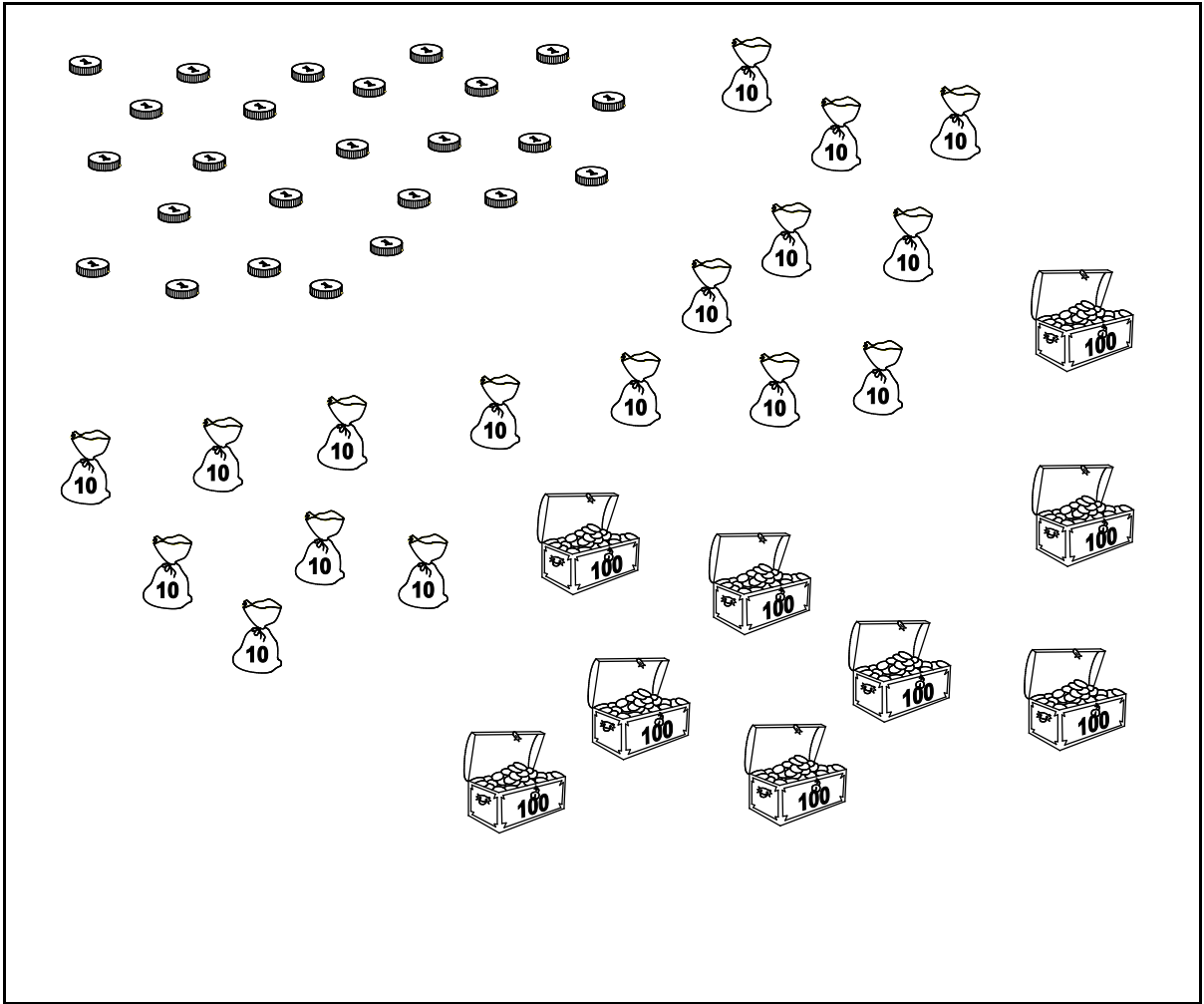
The collection consists of:

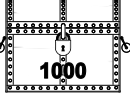



- 100 individual gold coins arranged in a 10x10 grid.
- 10 bags, each labeled '10', representing 100 coins.
- 10 treasure chests, each labeled '100', representing 10,000 coins.
- 1 treasure chest labeled '1000', representing 100,000 coins.

	<input type="text"/>	:	<input type="text"/>		<input type="text"/>	:	<input type="text"/>
	<input type="text"/>	:	<input type="text"/>		<input type="text"/>	:	<input type="text"/>

There are gold coins in this collection.

b)



		:				:	
		:				:	

There are gold coins in this collection.