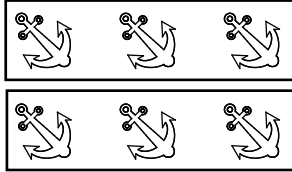
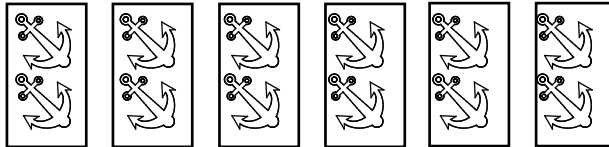


**Handout****Reinforcement****ANSWER  
KEY****2 - 4**  
Section 12**The Meaning of Multiplication –  
The Meaning of Division****1. Solve** the multiplications. **Use** the pictures to help you find the products.


a)  $2 \times 3 =$

**6**


b)  $6 \times 2 =$

**12**

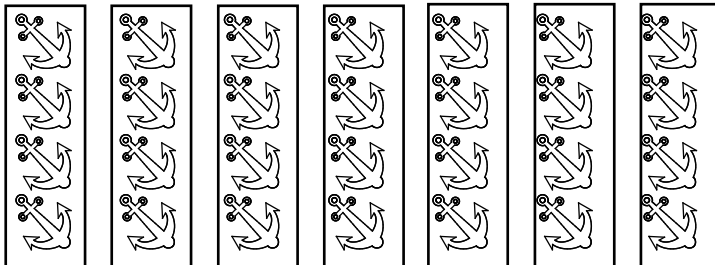
c)  $3 \times 3 =$

**9**

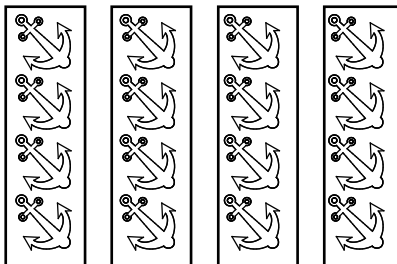
d)  $6 \times 3 =$

**18**

e)  $7 \times 4 =$

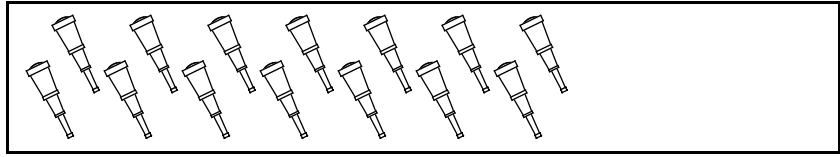
**28**

f)  $4 \times 4 =$

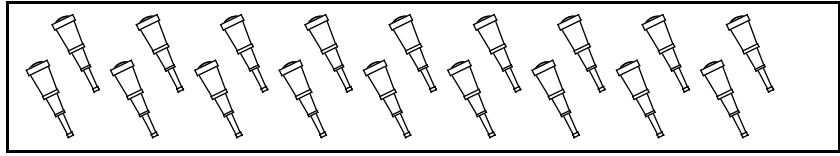
**16**

**2. Solve the divisions. Use the pictures to help you find the quotients.**

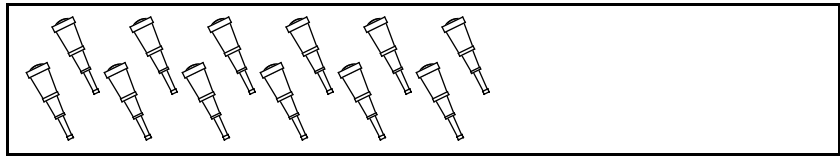
a)  $14 \div 7 =$

**2**

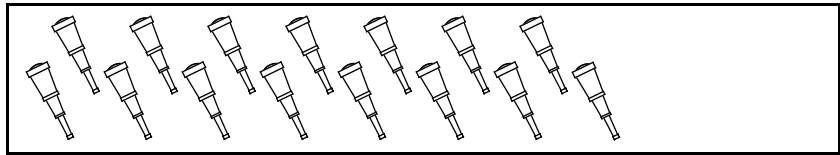
b)  $18 \div 6 =$

**3**

c)  $12 \div 3 =$

**4**

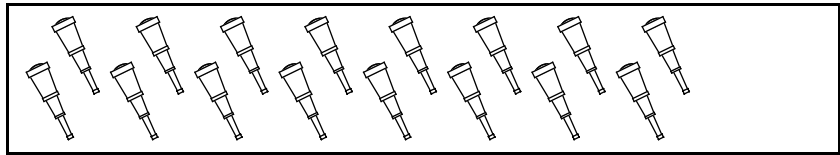
d)  $15 \div 5 =$

**3**

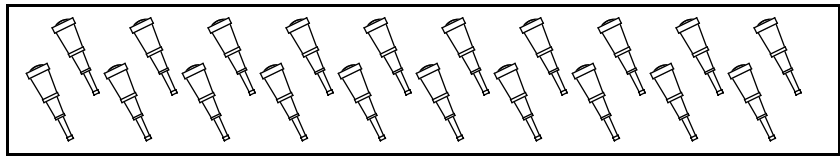
e)  $8 \div 4 =$

**2**

f)  $16 \div 2 =$

**8**

g)  $20 \div 4 =$

**5**

h)  $10 \div 2 =$

**5**