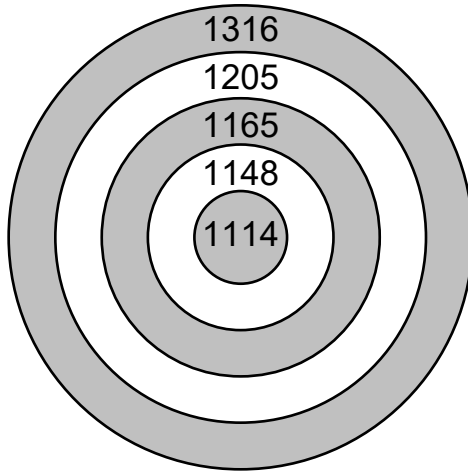


Handout**1 - 4**
Section 6**Enrichment****Darts****ANSWER
KEY****Find** the 2 rings where each player's darts landed.

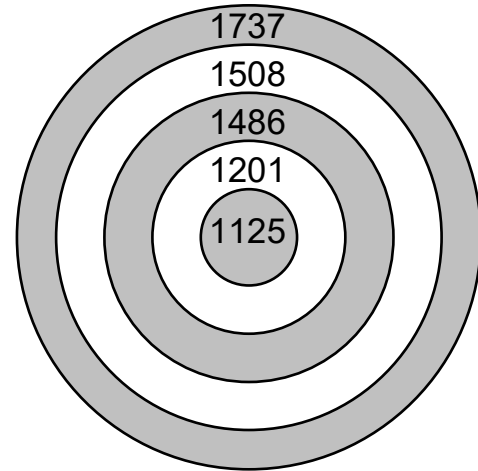
a)



$$\text{Alice: } 2370 = \boxed{1165} + \boxed{1205}$$

$$\text{Laura: } 2430 = \boxed{1114} + \boxed{1316}$$

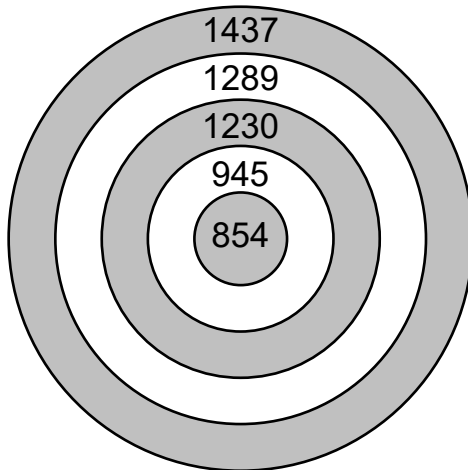
b)



$$\text{Charles: } 2938 = \boxed{1201} + \boxed{1737}$$

$$\text{Benny: } 2633 = \boxed{1125} + \boxed{1508}$$

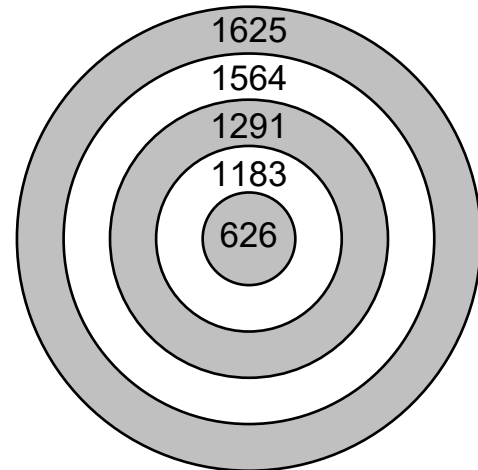
c)



$$\text{Emily: } 492 = \boxed{1437} - \boxed{945}$$

$$\text{Judith: } 435 = \boxed{1289} - \boxed{854}$$

d)



$$\text{Gabriel: } 557 = \boxed{1183} - \boxed{626}$$

$$\text{Francis: } 273 = \boxed{1564} - \boxed{1291}$$