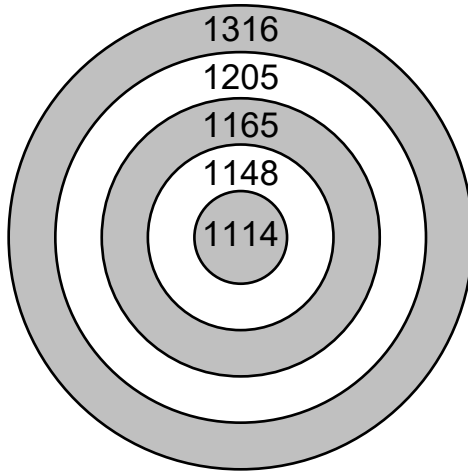


Handout**1 - 4**
Section 6**Enrichment****Darts****Find** the 2 rings where each player's darts landed.

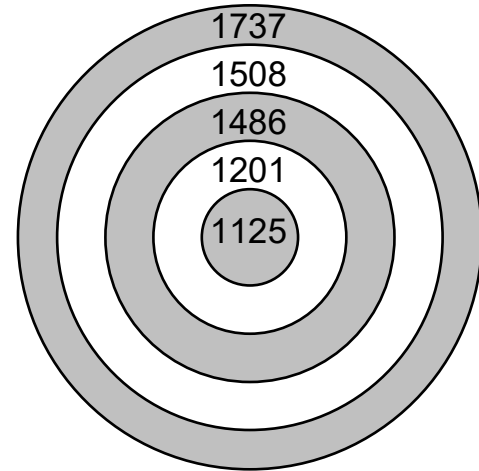
a)



$$\text{Alice: } 2370 = \boxed{} + \boxed{}$$

$$\text{Laura: } 2430 = \boxed{} + \boxed{}$$

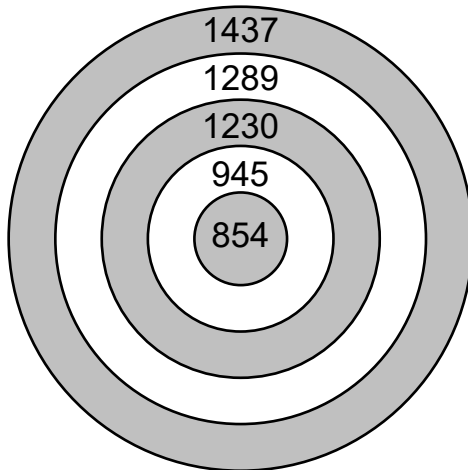
b)



$$\text{Charles: } 2938 = \boxed{} + \boxed{}$$

$$\text{Benny: } 2633 = \boxed{} + \boxed{}$$

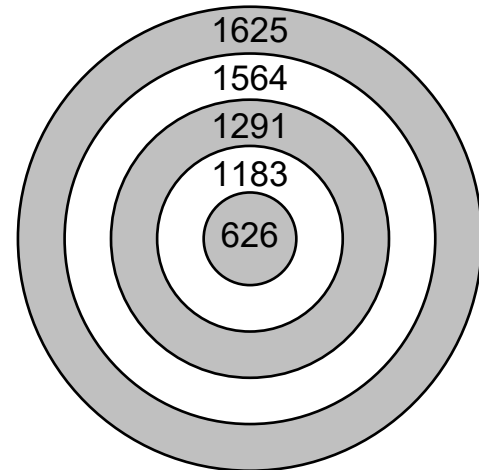
c)



$$\text{Emily: } 492 = \boxed{} - \boxed{}$$

$$\text{Judith: } 435 = \boxed{} - \boxed{}$$

d)



$$\text{Gabriel: } 557 = \boxed{} - \boxed{}$$

$$\text{Francis: } 273 = \boxed{} - \boxed{}$$